
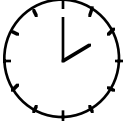
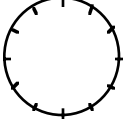
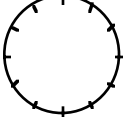
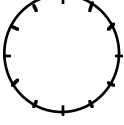
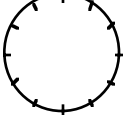
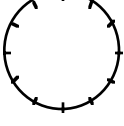
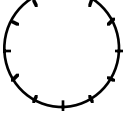
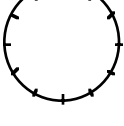
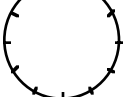


# MathFLIX CHALLENGE

## Measuring Angles

Use the hands on a clock to help measure angles. Complete the chart below.

<u>Picture</u>	<u>Time</u>	<u>Degrees</u>	<u>Proportion</u>
	<b>1:00</b>	30°	$\frac{1}{12} = \frac{30}{360}$
	<b>2:00</b>	60°	$\frac{2}{12} = \frac{60}{360}$
	<b>3:00</b>	90°	$\frac{3}{12} = \frac{90}{360}$
	<b>4:00</b>	_____	___ = ___
	<b>5:00</b>	_____	___ = ___
	<b>6:00</b>	_____	___ = ___
	<b>7:00</b>	_____	___ = ___
	<b>8:00</b>	_____	___ = ___
	<b>9:00</b>	_____	___ = ___
	<b>10:00</b>	_____	___ = ___